

Name: _____

Kindergarten

Subtraction from 10

St. Patrick's Day subtraction

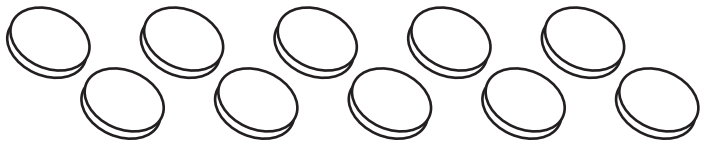
Directions: Use the pictures to solve the subtraction problems.



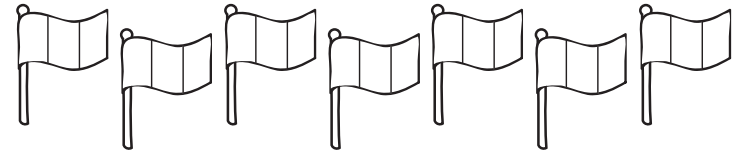
$$\underline{6} - \underline{2} = \underline{\quad}$$



$$\underline{9} - \underline{4} = \underline{\quad}$$



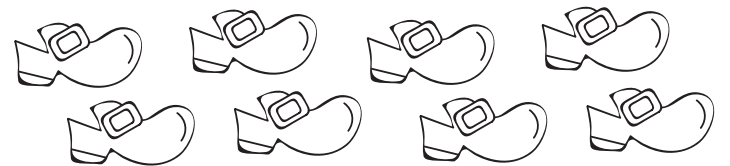
$$\underline{10} - \underline{3} = \underline{\quad}$$



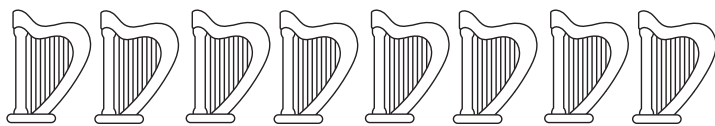
$$\underline{7} - \underline{4} = \underline{\quad}$$



$$\underline{7} - \underline{5} = \underline{\quad}$$



$$\underline{8} - \underline{7} = \underline{\quad}$$



$$\underline{8} - \underline{2} = \underline{\quad}$$



$$\underline{9} - \underline{1} = \underline{\quad}$$