

Name: _____

Kindergarten



Addition





Gingerbread man addition





Directions: Count the gingerbread men. Write the numbers and then add them together.



$$\underline{\quad} + \underline{\quad} = \underline{\quad}$$



$$\underline{\quad} + \underline{\quad} = \underline{\quad}$$



$$\underline{\quad} + \underline{\quad} = \underline{\quad}$$

Name: _____

Kindergarten


Addition





Gingerbread man addition





Directions: Count the gingerbread men. Write the numbers and then add them together.



$$\underline{\quad} + \underline{\quad} = \underline{\quad}$$



$$\underline{\quad} + \underline{\quad} = \underline{\quad}$$



$$\underline{\quad} + \underline{\quad} = \underline{\quad}$$

Name: _____

Kindergarten



Addition





Gingerbread man addition





Directions: Count the gingerbread men. Write the numbers and then add them together.



$$\underline{\quad} + \underline{\quad} = \underline{\quad}$$



$$\underline{\quad} + \underline{\quad} = \underline{\quad}$$



$$\underline{\quad} + \underline{\quad} = \underline{\quad}$$

Name: _____

Kindergarten

Addition



Gingerbread man addition




Directions: Cut and paste the gingerbread men to solve the addition problem.

$$\begin{array}{c} \mathbf{2} \\ \text{[Blank space]} \end{array} + \begin{array}{c} \mathbf{1} \\ \text{[Blank space]} \end{array} = \underline{\hspace{2cm}}$$

$$\begin{array}{c} \mathbf{1} \\ \text{[Blank space]} \end{array} + \begin{array}{c} \mathbf{3} \\ \text{[Blank space]} \end{array} = \underline{\hspace{2cm}}$$



Cut and paste the gingerbread men.



Name: _____

Kindergarten

Addition



Gingerbread man addition




Directions: Cut and paste the gingerbread men to solve the addition problem.

$$\begin{array}{c} \mathbf{1} \\ \text{[Blank space]} \end{array} + \begin{array}{c} \mathbf{4} \\ \text{[Blank space]} \end{array} = \underline{\hspace{2cm}}$$

$$\begin{array}{c} \mathbf{1} \\ \text{[Blank space]} \end{array} + \begin{array}{c} \mathbf{1} \\ \text{[Blank space]} \end{array} = \underline{\hspace{2cm}}$$



Cut and paste the gingerbread men.



Name: _____

Kindergarten

Addition



Gingerbread man addition



Directions: Cut and paste the gingerbread men to solve the addition problem.

$$\begin{array}{|c|} \hline 2 \\ \hline \end{array} + \begin{array}{|c|} \hline 2 \\ \hline \end{array} = \underline{\quad}$$

$$\begin{array}{|c|} \hline 3 \\ \hline \end{array} + \begin{array}{|c|} \hline 2 \\ \hline \end{array} = \underline{\quad}$$



Cut and paste the gingerbread men.

