



Thank you for downloading  
these free printable  
tens and ones worksheets.

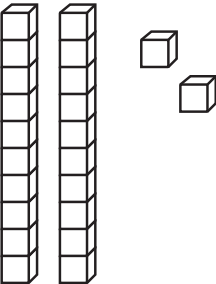
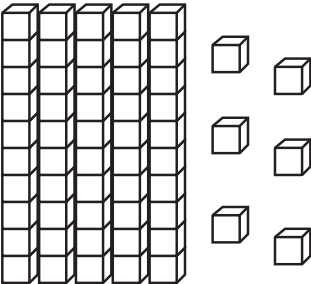
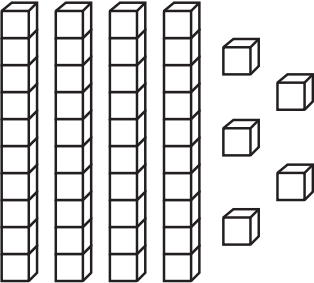
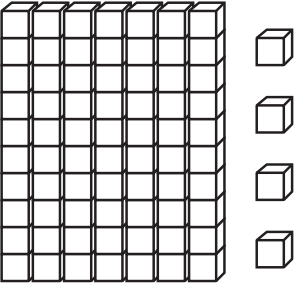
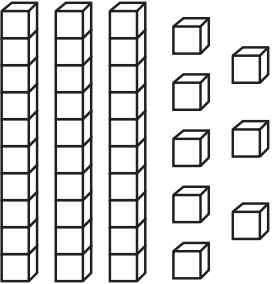
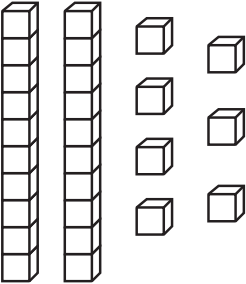
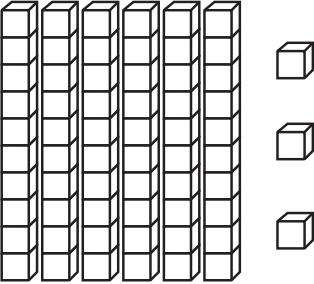
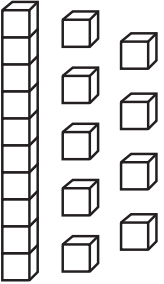
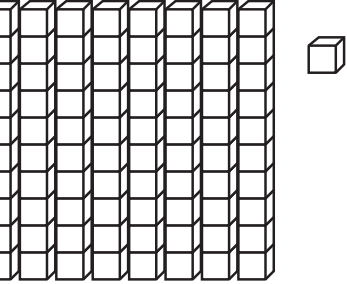
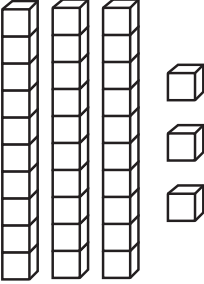
This printable is for personal and classroom  
use **ONLY**.

Please, do **NOT** redistribute or resell  
this printable set in any way.

©PlanesAndBalloons.com

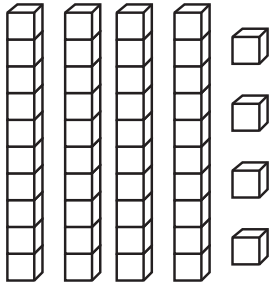
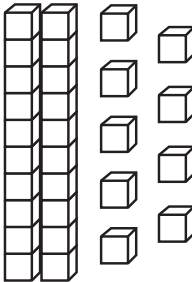
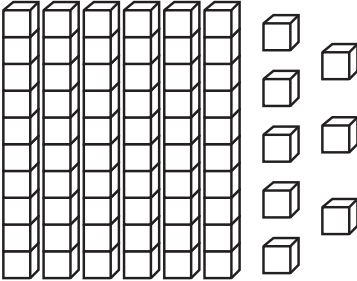

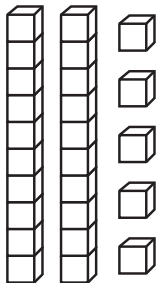
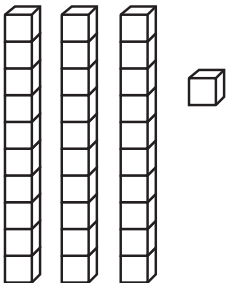
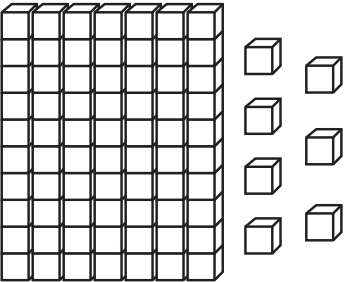
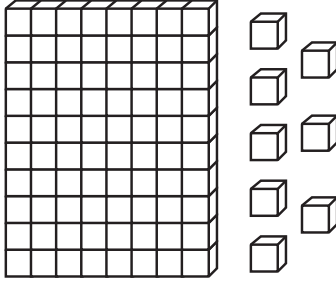
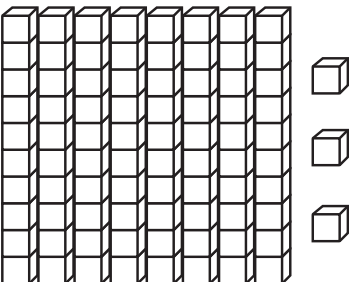
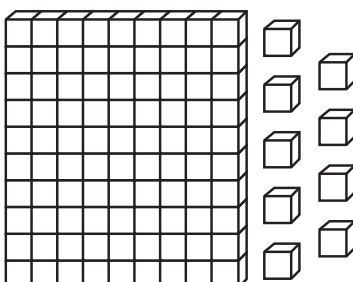
# Tens and ones

Directions: Count how many tens and ones are in each box. Then write the numbers.

	<table border="1"><thead><tr><th>Tens</th><th>Ones</th></tr></thead><tbody><tr><td> </td><td> </td></tr></tbody></table>	Tens	Ones				<table border="1"><thead><tr><th>Tens</th><th>Ones</th></tr></thead><tbody><tr><td> </td><td> </td></tr></tbody></table>	Tens	Ones		
Tens	Ones										
Tens	Ones										
	<table border="1"><thead><tr><th>Tens</th><th>Ones</th></tr></thead><tbody><tr><td> </td><td> </td></tr></tbody></table>	Tens	Ones				<table border="1"><thead><tr><th>Tens</th><th>Ones</th></tr></thead><tbody><tr><td> </td><td> </td></tr></tbody></table>	Tens	Ones		
Tens	Ones										
Tens	Ones										
	<table border="1"><thead><tr><th>Tens</th><th>Ones</th></tr></thead><tbody><tr><td> </td><td> </td></tr></tbody></table>	Tens	Ones				<table border="1"><thead><tr><th>Tens</th><th>Ones</th></tr></thead><tbody><tr><td> </td><td> </td></tr></tbody></table>	Tens	Ones		
Tens	Ones										
Tens	Ones										
	<table border="1"><thead><tr><th>Tens</th><th>Ones</th></tr></thead><tbody><tr><td> </td><td> </td></tr></tbody></table>	Tens	Ones				<table border="1"><thead><tr><th>Tens</th><th>Ones</th></tr></thead><tbody><tr><td> </td><td> </td></tr></tbody></table>	Tens	Ones		
Tens	Ones										
Tens	Ones										
	<table border="1"><thead><tr><th>Tens</th><th>Ones</th></tr></thead><tbody><tr><td> </td><td> </td></tr></tbody></table>	Tens	Ones				<table border="1"><thead><tr><th>Tens</th><th>Ones</th></tr></thead><tbody><tr><td> </td><td> </td></tr></tbody></table>	Tens	Ones		
Tens	Ones										
Tens	Ones										

# Tens and ones

Directions: Count how many tens and ones are in each box. Then write the numbers.

	<table border="1"><thead><tr><th>Tens</th><th>Ones</th></tr></thead><tbody><tr><td> </td><td> </td></tr></tbody></table>	Tens	Ones				<table border="1"><thead><tr><th>Tens</th><th>Ones</th></tr></thead><tbody><tr><td> </td><td> </td></tr></tbody></table>	Tens	Ones		
Tens	Ones										
Tens	Ones										
	<table border="1"><thead><tr><th>Tens</th><th>Ones</th></tr></thead><tbody><tr><td> </td><td> </td></tr></tbody></table>	Tens	Ones				<table border="1"><thead><tr><th>Tens</th><th>Ones</th></tr></thead><tbody><tr><td> </td><td> </td></tr></tbody></table>	Tens	Ones		
Tens	Ones										
Tens	Ones										
	<table border="1"><thead><tr><th>Tens</th><th>Ones</th></tr></thead><tbody><tr><td> </td><td> </td></tr></tbody></table>	Tens	Ones				<table border="1"><thead><tr><th>Tens</th><th>Ones</th></tr></thead><tbody><tr><td> </td><td> </td></tr></tbody></table>	Tens	Ones		
Tens	Ones										
Tens	Ones										
	<table border="1"><thead><tr><th>Tens</th><th>Ones</th></tr></thead><tbody><tr><td> </td><td> </td></tr></tbody></table>	Tens	Ones				<table border="1"><thead><tr><th>Tens</th><th>Ones</th></tr></thead><tbody><tr><td> </td><td> </td></tr></tbody></table>	Tens	Ones		
Tens	Ones										
Tens	Ones										
	<table border="1"><thead><tr><th>Tens</th><th>Ones</th></tr></thead><tbody><tr><td> </td><td> </td></tr></tbody></table>	Tens	Ones				<table border="1"><thead><tr><th>Tens</th><th>Ones</th></tr></thead><tbody><tr><td> </td><td> </td></tr></tbody></table>	Tens	Ones		
Tens	Ones										
Tens	Ones										