



Thank you for downloading
these ten frame addition worksheets.

This printable is for personal and classroom
use **ONLY**.

Please, do **NOT** redistribute or resell
this printable set in any way.

©PlanesAndBalloons.com


Name: _____

1st


Ten frames addition

ADD THEM UP!

Directions: Write the addition sentences and solve.


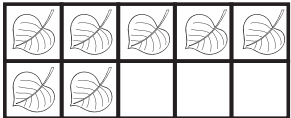


1.




_____ + _____ = _____

2.





_____ + _____ = _____

3.




_____ + _____ = _____

4.




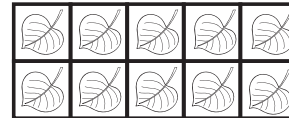
_____ + _____ = _____

5.




_____ + _____ = _____

6.





_____ + _____ = _____

7.



_____ + _____ = _____

8.



_____ + _____ = _____


Name: _____

1st


Ten frames addition

ADD THEM UP!

Directions: Write the addition sentences and solve.


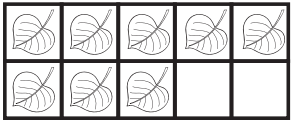


1.



_____ + _____ = _____

2.





_____ + _____ = _____

3.




_____ + _____ = _____

4.



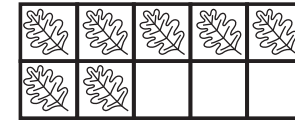
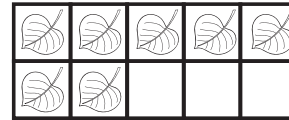
_____ + _____ = _____

5.




_____ + _____ = _____

6.



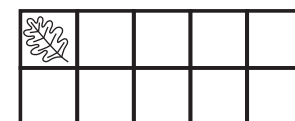

_____ + _____ = _____

7.



_____ + _____ = _____

8.



_____ + _____ = _____