



Thank you for downloading
these subtraction word problems.

This printable is for personal and classroom
use **ONLY**.

Please, do **NOT** redistribute or resell
this printable set in any way.

The images and printable are a
property of PlanesAndBalloons.com

©PlanesAndBalloons.com

February




addition & subtraction

mini book



Name: _____

I got 7 heart stickers and 6 flower stickers from my friends. How many stickers did I get altogether?




$$\underline{\quad} + \underline{\quad} = \underline{\quad}$$

There were 12 chocolates in the box. I already ate 6. How many chocolates do I have left?




$$\underline{\quad\quad} - \underline{\quad\quad} = \underline{\quad\quad}$$

We decorated heart cookies. I made 9 pink cookies and my friend made 7 yellow cookies. How many cookies did we decorate altogether?




$$\underline{\quad\quad} + \underline{\quad\quad} = \underline{\quad\quad}$$

I had 15 pieces of candy in my candy bag. I gave 4 to my friend Ed. How many pieces of candy do I have left in my bag?



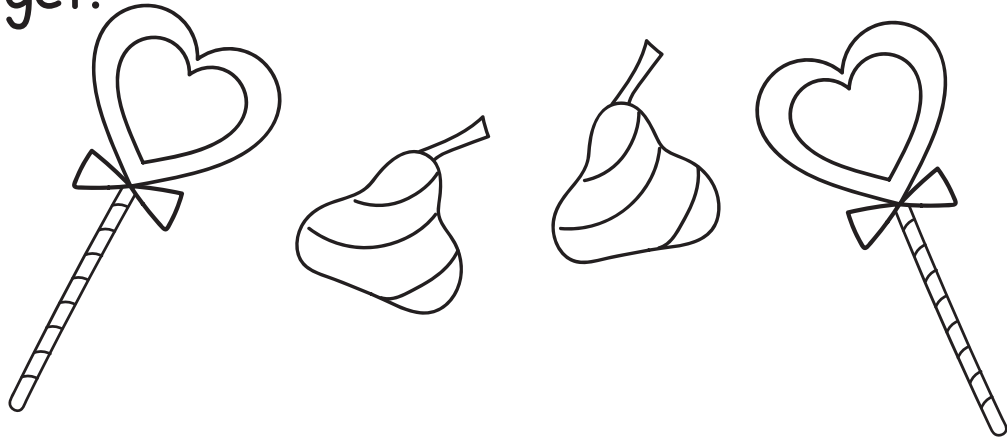
$$\underline{\hspace{2cm}} \quad \underline{\hspace{2cm}} = \underline{\hspace{2cm}}$$

I made 18 Valentines for my friends. So far I gave 10 to my friends. How many more Valentines I have left to deliver?




$$\underline{\hspace{2cm}} \quad \underline{\hspace{2cm}} = \underline{\hspace{2cm}}$$

Jack got 3 chocolates and 7 lollipops for Valentine's day. How many pieces of candy did Jack get?




$$\underline{\quad\quad} + \underline{\quad\quad} = \underline{\quad\quad}$$

We made paper hearts to decorate the classroom. I made 7 pink hearts and Emma made 7 red hearts. How many hearts did we make altogether?



$$\underline{\quad\quad} + \underline{\quad\quad} = \underline{\quad\quad}$$

Mom made 20 heart cookies. We already ate 8.
How many cookies do we have left?



$$\underline{\hspace{2cm}} \quad \underline{\hspace{2cm}} \quad = \quad \underline{\hspace{2cm}}$$

My new book has 14 chapters. I already read 8.
How many chapters do I have left to read?



$$\underline{\hspace{2cm}} \quad \underline{\hspace{2cm}} \quad = \quad \underline{\hspace{2cm}}$$