



Thank you for downloading
these subtraction with regrouping
worksheets.

This printable is for personal and classroom
use ONLY.

Please, do NOT redistribute or resell
this printable set in any way.

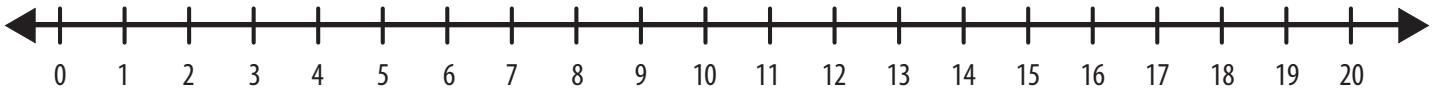
The images and printable are a
property of PlanesAndBalloons.com


©PlanesAndBalloons.com

Name: _____

SUBTRACTION within 20


Directions: Use the number line to solve the problems.





$$\begin{array}{r} 12 \\ - 4 \\ \hline \end{array}$$

$$\begin{array}{r} 16 \\ - 8 \\ \hline \end{array}$$

$$\begin{array}{r} 11 \\ - 2 \\ \hline \end{array}$$



$$\begin{array}{r} 10 \\ - 5 \\ \hline \end{array}$$

$$\begin{array}{r} 15 \\ - 6 \\ \hline \end{array}$$


$$\begin{array}{r} 20 \\ - 11 \\ \hline \end{array}$$



$$\begin{array}{r} 17 \\ - 6 \\ \hline \end{array}$$

$$\begin{array}{r} 14 \\ - 7 \\ \hline \end{array}$$


$$\begin{array}{r} 13 \\ - 3 \\ \hline \end{array}$$

$$\begin{array}{r} 11 \\ - 5 \\ \hline \end{array}$$

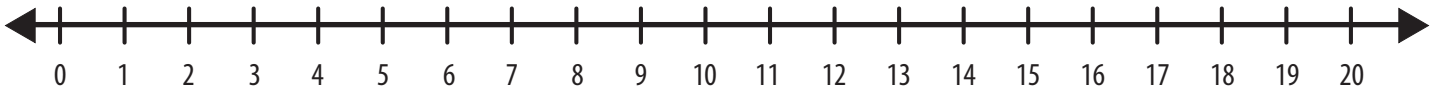
$$\begin{array}{r} 18 \\ - 9 \\ \hline \end{array}$$



$$\begin{array}{r} 12 \\ - 6 \\ \hline \end{array}$$


Name: _____

SUBTRACTION within 20


Directions: Use the number line to solve the problems.





$$\begin{array}{r} 15 \\ - 9 \\ \hline \end{array}$$

$$\begin{array}{r} 13 \\ - 5 \\ \hline \end{array}$$

$$\begin{array}{r} 12 \\ - 9 \\ \hline \end{array}$$

$$\begin{array}{r} 20 \\ - 15 \\ \hline \end{array}$$



$$\begin{array}{r} 14 \\ - 5 \\ \hline \end{array}$$


$$\begin{array}{r} 20 \\ - 10 \\ \hline \end{array}$$


$$\begin{array}{r} 12 \\ - 3 \\ \hline \end{array}$$

$$\begin{array}{r} 11 \\ - 4 \\ \hline \end{array}$$

$$\begin{array}{r} 13 \\ - 6 \\ \hline \end{array}$$


$$\begin{array}{r} 10 \\ - 8 \\ \hline \end{array}$$

$$\begin{array}{r} 13 \\ - 8 \\ \hline \end{array}$$


$$\begin{array}{r} 14 \\ - 6 \\ \hline \end{array}$$
